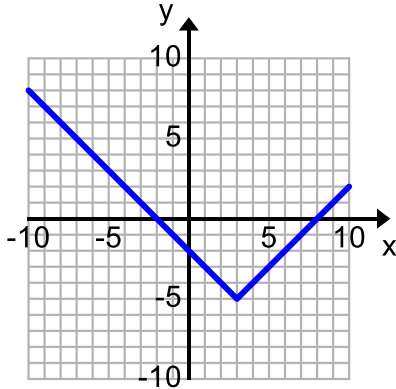


Identify the type of function and write the equation of the parent function for each graph.

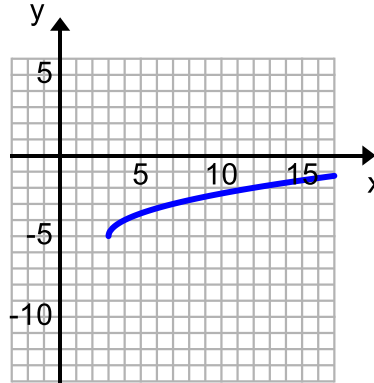
1) Function Type: _____

Parent Function (equation): _____



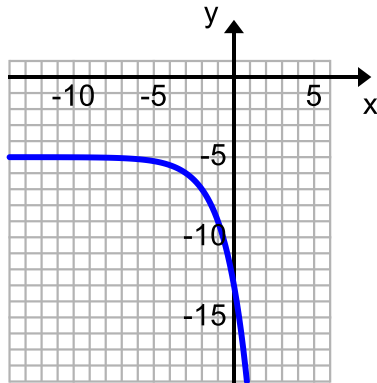
2) Function Type: _____

Parent Function (equation): _____



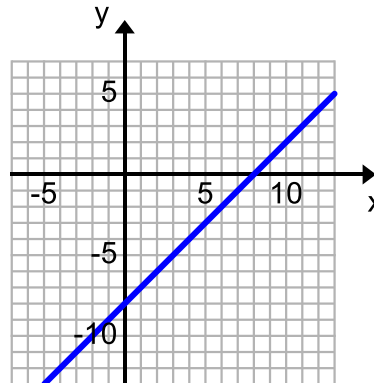
3) Function Type: _____

Parent Function (equation): _____



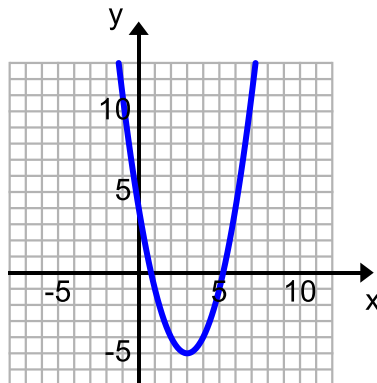
4) Function Type: _____

Parent Function (equation): _____



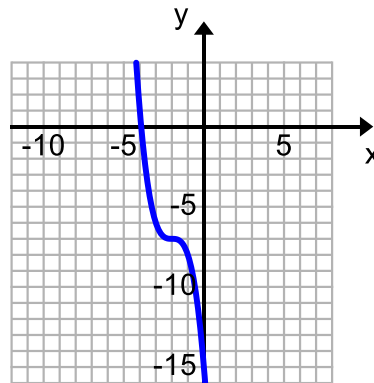
5) Function Type: _____

Parent Function (equation): _____



6) Function Type: _____

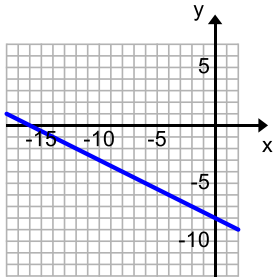
Parent Function (equation): _____



Identify the type of function and write the equation of the parent function for each graph.

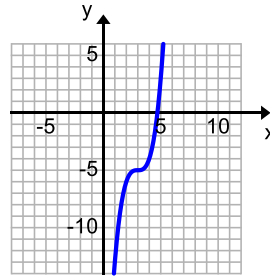
7) Function Type: _____

Parent Function (equation): _____



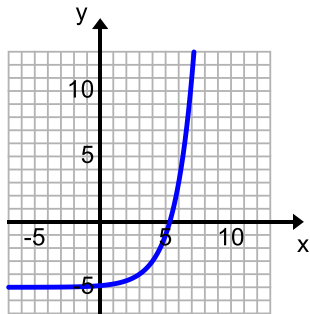
8) Function Type: _____

Parent Function (equation): _____



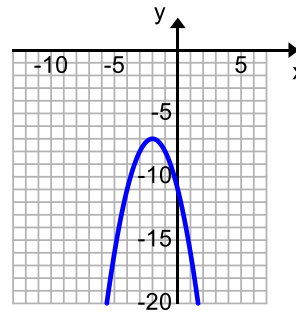
9) Function Type: _____

Parent Function (equation): _____



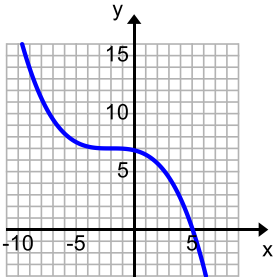
10) Function Type: _____

Parent Function (equation): _____



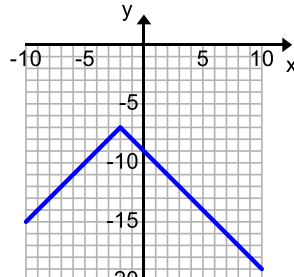
11) Function Type: _____

Parent Function (equation): _____



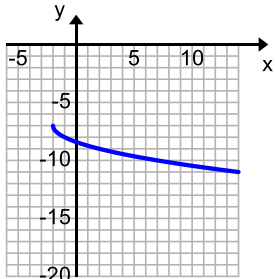
12) Function Type: _____

Parent Function (equation): _____



13) Function Type: _____

Parent Function (equation): _____



14) Function Type: _____

Parent Function (equation): _____

